

91390



NEW ZEALAND QUALIFICATIONS AUTHORITY
MANA TOHU MĀTAURANGA O AOTEAROA

QUALIFY FOR THE FUTURE WORLD
KIA NOHO TAKATŪ KI TŌ ĀMUA AO!

3

SUPERVISOR'S USE ONLY

Tick this box if you
have NOT written
in this booklet

Level 3 Chemistry 2021

91390 Demonstrate understanding of thermochemical principles and the properties of particles and substances

Credits: Five

Achievement	Achievement with Merit	Achievement with Excellence
Demonstrate understanding of thermochemical principles and the properties of particles and substances.	Demonstrate in-depth understanding of thermochemical principles and the properties of particles and substances.	Demonstrate comprehensive understanding of thermochemical principles and the properties of particles and substances.


Check that the National Student Number (NSN) on your admission slip is the same as the number at the top of this page.

You should attempt ALL the questions in this booklet.

A periodic table and other reference material are provided in the Resource Booklet L3-CHEMR.

If you need more room for any answer, use the extra space provided at the back of this booklet.

Check that this booklet has pages 2–12 in the correct order and that none of these pages is blank.

Do not write in any cross-hatched area () . This area may be cut off when the booklet is marked.

YOU MUST HAND THIS BOOKLET TO THE SUPERVISOR AT THE END OF THE EXAMINATION.

QUESTION ONE

(a) Complete the following table.

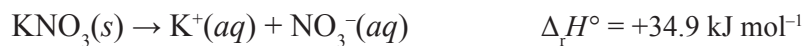
Symbol	Electron configuration (use <i>s</i> , <i>p</i> , <i>d</i> notation)
Sc	
Ga	
Fe ³⁺	

(b) (i) Complete the table below.

	SeF ₄	ClF ₄ ⁻
Lewis structure		
Name of shape		

(ii) Both $\Delta_{\text{vap}}H^\circ(\text{SeF}_4)$ and $\Delta_{\text{fus}}H^\circ(\text{SeF}_4)$ are positive.Explain why $\Delta_{\text{vap}}H^\circ(\text{SeF}_4)$ is more positive.

- (c) Potassium nitrate, KNO_3 , readily dissolves in water according to the equation below:



- (i) Justify, in terms of the entropy changes of the system and the surroundings, why the reaction is spontaneous.

- (ii) When solid KNO_3 dissolves in water, the temperature decreases from 21.3 °C to 14.2 °C.

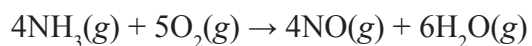
Calculate the mass of solid KNO_3 that must dissolve to cause this temperature decrease.

Assume the specific heat capacity of potassium nitrate solution is $4.18 \text{ J g}^{-1} \text{ }^\circ\text{C}^{-1}$.

Assume the mass of the potassium nitrate solution is 135 g.

$M(\text{KNO}_3) = 101 \text{ g mol}^{-1}$

- (c) (i) The equation for the reaction of ammonia, NH_3 , with oxygen, O_2 , is given below:



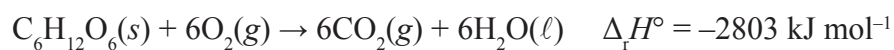
Calculate the standard enthalpy change for this reaction, $\Delta_r H^\circ$, using the following data:



- (ii) Explain why the standard enthalpy change calculated in part (i) would be more exothermic if the water was produced as a liquid.

- (b) (i) Write the equation for the reaction that has an enthalpy change equal to the standard enthalpy of formation, $\Delta_f H^\circ$, of solid glucose, $C_6H_{12}O_6(s)$.

- (ii) Glucose is oxidised during aerobic respiration according to the following equation:



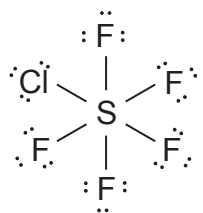
Calculate the standard enthalpy of formation of glucose, $\Delta_f H^\circ(C_6H_{12}O_6(s))$, using the following data:

$$\Delta_f H^\circ(CO_2(g)) = -394 \text{ kJ mol}^{-1}$$

$$\Delta_f H^\circ(H_2O(l)) = -286 \text{ kJ mol}^{-1}$$

Question Three continues
on the next page.

(c) The Lewis structure for chloropentafluorosulfane, SClF_5 , is given below:



Identify and explain the shape and polarity of SClF_5 .

**Extra space if required.
Write the question number(s) if applicable.**

**QUESTION
NUMBER**

**Extra space if required.
Write the question number(s) if applicable.**

QUESTION
NUMBER

91390